

2nd Class Teaching and Learning Notes update 8th-12th June 2020

Hello 2nd class students, parents and guardians,

We hope that you enjoyed the week off. Can you believe there are only three weeks left of school! Let's make them count!

Zoom Gatherings: We can't wait to catch up with everyone at our weekly Zoom gathering. Please let us know if your child would like to present work/a skill/ art. We look forward to our next call this week:

- Thursday 11th June at 10:00am to share work.

This week's theme: Nature & Pollination. See activity below.

Schoolwork: Below is the work for the week ahead. Do your best with this work but we understand it might be difficult to do it all. The three most important things you can do are: do lots of reading every single day, practise your spellings every week and revise your tables regularly.

Google Classroom: We hope that you have had time to get familiar with Google Classroom. If not, we please have a look at the introductory videos we have posted to guide you through using the website. We invite all our students to get familiar with this platform. We will continue to plan work for students using our current format, however, you can now upload some of this work to Google Classroom where your child's teacher can see and review it. This weeks structure for Classroom:

- Daily maths quiz
- Daily visual literacy challenge
- A writing activity - spelling story
- Short Gaeilge phonics quiz on Friday

Contacting Teacher/Sending in Work: Remember you can share your work, or any other activity/ active challenge/project you have completed, with your teacher using

- Google Classroom: Either upload a photo of the work or create the work using online documents.
- The email address homelearning@firhouseetns.ie
 - If using this email address, please put the teachers name in the subject line and let us know if you would like to share your work with just your teacher, or if you would like some of it shared on the school website.

Please get in touch if you need any further advice or support.






Very best wishes to you and your families,
Celine and Sarah

Maths

- Revision:
 - Worksheet 1 & 2: Data
 - Worksheet 3 & 4: Money
 - Worksheet 5: Colour by Numbers
- Mental Maths:
 - A short maths quiz will be uploaded to Google Classroom everyday.
- Tables: Optional worksheets with solutions on the COVID-19/Home Learning page for those who want them.
 - Everyday revise addition and subtraction tables for the **number 12** - Say them aloud and if possible, ask someone to quiz you at home! **Can you find a pattern with these tables?**

English

- Spellings/Writing: See spelling list in box below.
 - Write each word 3 times.
 - Write a spelling story using at least 7 spellings and upload it to Google Classroom, if possible. In your story, underline the words from your spelling list so they stand out.

Rule: long /o/ sounding like "uh"	ark	gloves	front	monkey	woman
	clever	son	dozen	somebody	women
Challenge: Can you think of any other words with this rule?	Look	Say	Cover	Write	Check
					

- Free Writing: encourage your child to write for pleasure. Remember, free writing is not corrected and is for enjoyment. They could write a story, a poem, a song, a list, a report.
- Reading:
 - Read as much as you can! Read in your head or aloud for someone for at least 10 minutes everyday.
- Visual Literacy:
 - Daily challenge on Google Classroom

Gaeilge

- Reading: Use Google Classroom to read and listen to books about how **c, l, m, n, r** sound in Irish
 - Choose one book to read a day. After listening to each word, say it out loud. After a few goes, challenge yourself to read the book without the voiceover.
- On Friday, complete a short quiz on Google Classroom based on the pictures and words from this week's phonic books.

Project: Set up an outdoor obstacle course. Use whatever you have (chalk, balls, skipping rope, etc) to make your course. You can send us in a picture or video of you doing the course too!

Art: This week we have a very exciting activity. Lonán (Sarah's Class) and his family featured on a podcast for RTÉjr. They spoke all about bees and the important job they do. It is very interesting to listen to all the facts about bees and how Lonán's granny Hudie, who some of us met on Grandparent's Day, looks after them.

- Have a listen to episode 19 of RTÉjr's podcast here:
https://www.rte.ie/radio1/podcast/podcast_ecolution.xml
- Keep a special listen out between the minutes 12:50 to 17:00 and you will hear members of our own school community, including Lonán from second class!
- Create a poster/drawing of what you hear and learn when listening to the podcast

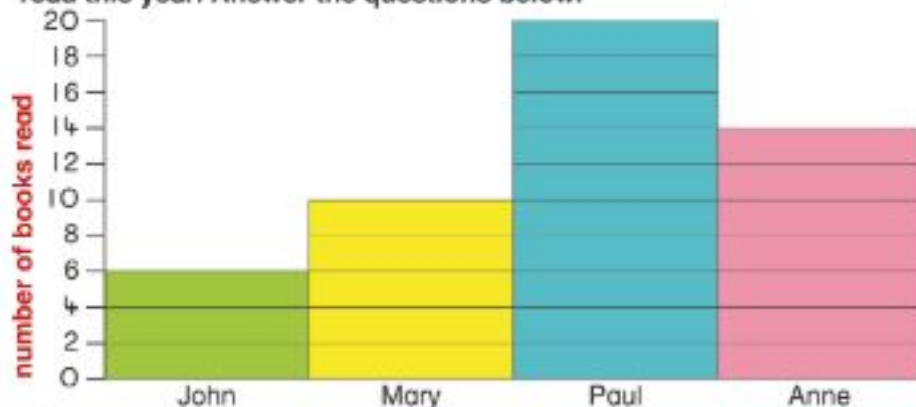


A Write the missing numbers.

1. I have toes altogether.
2. There were 20 children in 2nd Class. There were 5 boys and girls.
3. There are 9 beads on a necklace. I added 8 more.
There are now beads on the necklace.
4. There are 11 children on a football team.
There are children on 2 teams.
5. A chair has 4 legs. There are legs on 4 chairs.



B This block graph shows the number of books that 4 children have read this year. Answer the questions below.



1. Who read the most books? _____.
2. Who read the least books? _____.
3. How many children were in the survey?
4. How many more books did Paul read than John?
5. How many fewer books did Mary read than Anne?
6. How many books altogether did John and Anne read?
7. How many books did Mary and Paul read altogether?
8. How many books did Paul, Anne and Mary read altogether?



C In your copy. Create a block graph of your class's favourite ice-cream flavours. Make up 10 questions to ask your partner based on your graph.



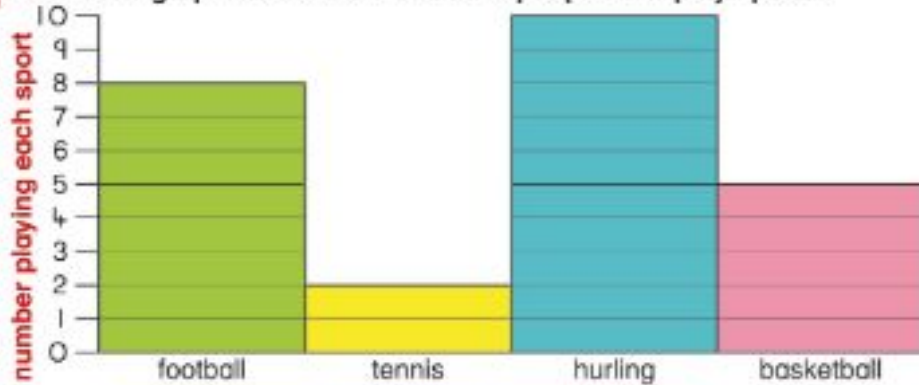


A Match each question with the correct answer.

1. How many ears do you have?
2. There were 20 cakes in a box and I ate 3. How many were left?
3. How many toes on 2 feet?
4. John and Paul had 11 cars altogether. John had 7. How many cars had Paul?
5. How many eggs in half a dozen?

- 10
- 6
- 17
- 2
- 4

B This block graph shows the number of people who play sports.



Answer the questions.

1. Which sport is played the most? _____
2. Which sport is played the least? _____
3. How many people play sports altogether?
4. _____ is twice as popular as basketball.
5. How many **more** people play football than tennis?
6. How many **fewer** people play tennis than hurling?
7. How many people altogether play basketball and football?
8. How many people altogether play tennis, basketball and hurling?



C In your copy. Create your own block graph of class's favourite sports. Make up 10 questions based on the graph. Ask your friend to answer your questions.



I will learn to write 135 cent as €1.35



A Write each amount in cent.

1. c
€1.06



2. c
€1.63

3. c
€1.80

4. c
€2.00

5. c
€1.47

6. c
€1.52



- How much money has each child?
Jean € _____ Beth € _____ Jack € _____
Sue € _____ Jim € _____ Tom € _____
- How much more has Sue than Jean? € _____
- How much have Jean, Jim and Jack altogether? € _____
- How much more does Jean need to have €1.50? € _____
- How much more than 50c has Tom? € _____
- How much more does Beth need to have €2? € _____



C Write the answers to these questions in cent and using the € symbol.

- Sarah bought 2 portions of chips at 94c each.
 - How much did she spend? c or € _____
 - How much change had she from €2? or € _____
- John had €1.12. He wanted to buy a milkshake for 74c and ice-cream for 47c.
 - Did he have enough money? _____
 - How much more money did he need? c or € _____



I will add and subtract amounts of money.



A True or false? ✓ or ✗.

1. €2 - 20c - 10c = €1.60

2. €1 - 10c - 5c = €0.85

3. €2 - €1 - 20c = €0.80

4. €1.50 - 20c - 20c - 10c = €1.05

5. €2 - 20c - 20c - 5c = €0.65



B Fill in the amounts on the blank coins.



1. Which 2 coins make up 12c?

2. Which 3 coins make up 115c?

3. Which 3 coins make up 17c?

4. Which 5 coins make up 108c?

5. Which 5 coins make up €1.16?

6. Which 3 coins make up 62c?

7. Which 7 coins make up 106c?

8. Which 6 coins make up €1.18?

9. Which 10 coins make up 65c?

10. Which 9 coins make up €1.58?

C In your copy. Amy bought a toy using only coins.

It cost her 45c. There are 8 different ways to pay 45c exactly using only the above coins. Find as many as you can.



Colour by Numbers

80
- 69

43 - 81

45
- 30

64
- 46

39
- 27

99
- 88

77
- 63

61 - 47

31 - 15

55 - 40

44 - 26

16 72
- 56

91 - 73

30 - 13

61
- 48

11	Blue
12	Purple
13	Green
14	Yellow
15	Orange
16	Dark Blue
17	Pink
18	Brown